

SUCCESS INTEGRATED PRIMARY SCHOOL

PRIMARY LEAVING EXAMINATION SET 1, 2020

PRIMARY SEVEN

SOCIAL STUDIES & RE

Time allowed: 2 hours 30 minutes



NAME: _____

INDEX NUMBER

--	--	--	--	--	--	--	--	--

EMIS NO: _____ SIGNATURE: _____

DO NOT OPEN THIS BOOKLET UNTIL YOU ARE TOLD TO DO SO

Read the following instructions carefully:

1. The paper has **two** sections: **A** and **B**
2. Section **A** has 40 questions (40 marks)
3. Section **B** has 15 questions (60 marks)
4. Answer **ALL** questions. All answers to both Sections A and B must be written in the spaces provided.
5. All answers must be written using a blue or black ball point pen or ink. Diagrams should be drawn in pencil.
6. Unnecessary crossing of work may lead to loss of marks.
7. Any handwriting that cannot be easily read may lead to loss of marks.
8. Do **not** fill anything in the boxes indicated;

FOR EXAMINER'S USE ONLY		
Qn. No	MARK	SIGN
1 – 10		
11 – 20		
21 – 30		
31 – 40		
41 – 43		
44 – 46		
47 – 49		
50 – 52		
53 – 55		
TOTAL		

“With God All is Possible”

PTO

SECTION A

1. What is the compass direction of Democratic Republic of Congo from Kenya?

2. Which cash crop is grown in Kumasi in Ghana?

3. Why is it difficult to travel by boat between Jinja and Pakwach?

4. Write UPE in full.

5. Name the ocean current responsible for dry condition in Namib Desert.

6. Why was Liberia not colonized?

7. How does legislature help judiciary to do its work?

8. Which ethnic group in East Africa originated from Cameroon highlands?

9. Give one way democracy is practiced in Uganda.


10. Why is English spoken in Nigeria and Uganda?

11. How do commercial banks help people to develop?

12. Name the organization that replaced organization of African Unity (OAU).

13. Give any one reason for the formation of IBEACO.

14. Give one reason why the British settled in Kenya highlands.



15. Give one advantage which a country with a large population has.
-
16. How was the Union Jack (British flag) treated on the 9th October, 1962?
-
17. Why is it not proper to harvest crops during a wet season?
-
18. Which important discovery marked the end of Stone Age?
-
19. How did the Berlin conference affect Africa?
-
20. Why is road construction difficult in Kapchorwa district?
-
21. Give one-way order is kept at school.
-
22. Give any one reason for the coming of Arabs to East Africa.
-
23. What is the duty of the police in a country?
-
24. Give one way tobacco flue curing affects the environment.
-
25. Name one country in the Horn of Africa.
-
26. Why is Africa known as the cradle land of man?
-
27. Ghana lies on Prime meridian. If the time in Ghana is 8:00p.m. What time will it be in East African standard time?
-

28. What was apartheid as used in South Africa?

29. Which body is responsible for building major roads in Uganda?

30. Give one example of Crater Lake in Uganda.

31. Name one human basic need.

32. Which mineral is mined in Osukuru hills in Tororo?

33. How is the formation of Atlas Mountains different from Drakensberg Mountains?

34. How are camels helpful to the Berbers of North Africa?

35. Name the major crop grown in the Kilombero irrigation scheme in Tanzania.

For questions 36 – 40, answer either the Christian or the Islamic questions

36. **Either:** Why was King Herod not happy with the birth of Jesus?


Or: Why did Mohammed leave Mecca to go to Medina?

37. **Either:** State one commandment which protects married Christians.

Or: Give one pillar of Iman which is similar to that of Ibadat.

38. **Either:** What does Jesus teach us to do to those who do wrong to us?

Or: What reward is given to a person who repents sincerely to Allah?



39. **Either:** Why were the Jews against Jesus Christ?

Or: How do Moslems get the title Haji or Hajat?

40. **Either:** Why was Moses called to Mt. Sinai?

Or: Which celebration mark the end of fasting during Ramadhan?

SECTION B (60 MARKS)

41. a) Identify one tribe in Nigeria that practices transhumance.

b) Give any two problems faced by the above mentioned people in (a) above.

i) _____

ii) _____

c) Give any one social importance of cattle to the pastoralist.

42. a) What was the Great Trek?

b) State any two results of Great Trek.

i) _____

ii) _____

c) Mention any one place the Dutch settled after the Great Trek.

43. a) Give any two factors that have led to industrial development in Africa.

i) _____

ii) _____

b) State two ways people benefit from industries in an area.

i) _____

ii) _____

44. a) Why were Ugandans not happy with Legco before 1945?

b) Give any first two Ugandans to join Legco.

i) _____

ii) _____

c) How did they join Legco?

45. a) Name any one common market in Africa.

b) State any two benefits of common markets to their member states.

i) _____

ii) _____

c) Why is their limited trade between some member countries of common markets?

46. a) Mention any two oil producing countries in Africa.

i) _____


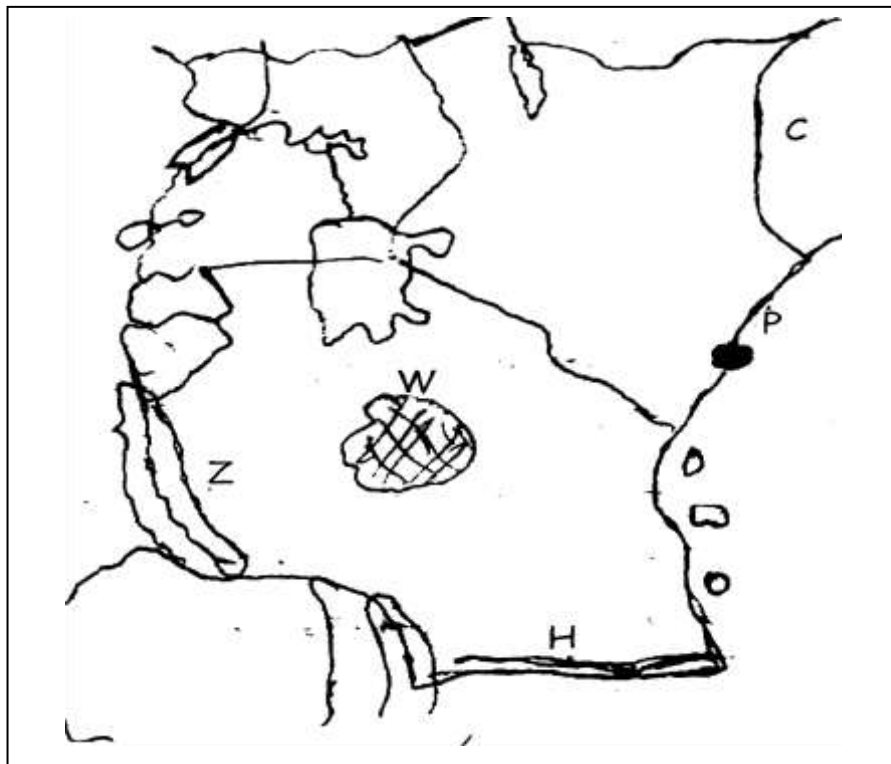
ii) _____

b) Give any two products got from petroleum.

i) _____

ii) _____

47. Use the map to answer questions that follow



- a) Name the country C. _____
- b) Why is area W having a low population?

- c) Of what political importance is river H?

- d) Give the importance of town P to Uganda.

48. a) What does the term independence mean?

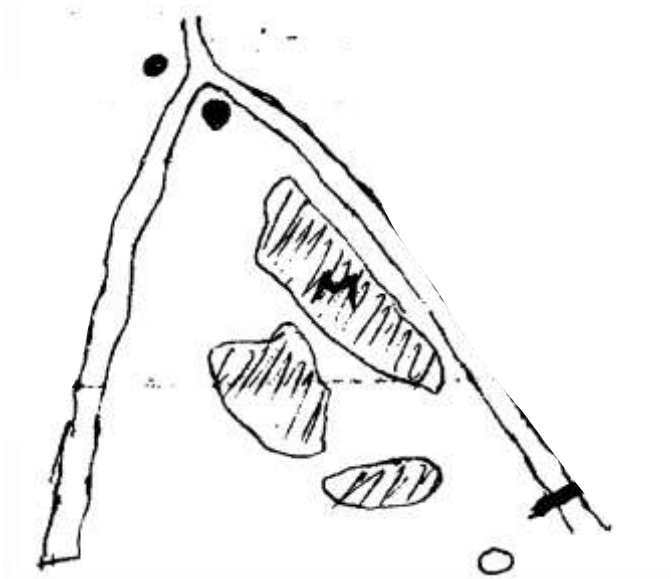
b) Give two reasons why Africans fought for independence.

i) _____

ii) _____


c) Which European country colonized DRC?

49. **Study the map below about Gezira irrigation scheme and answer questions**



a) Name the dam marked O. _____

b) Identify the major crop grown in M.



c) Between which two rivers is the above scheme located?

i) _____

ii) _____

50. a) Give two reasons why Mau-Mau rebellion took place.

i) _____

ii) _____

b) State two disadvantages of Mau-Mau rebellion.

i) _____

ii) _____

For questions 51 – 55, answer either Christian or Islamic questions but not both

51. **Either:** a) State any two reasons why Christians pray after waking up in the morning.

i) _____

ii) _____

b) Give any two symbols of a Christian family?

i) _____

ii) _____

Or: a) What is Salat?

b) Give any two reasons why Muslims pray.

i) _____

ii) _____

c) Which special prayers are conducted after Isha at night during Ramadan?

52. **Either:** a) Why is Apostle Thomas regarded as the apostle who had little faith?

b) Apart from Baptism, mention two other sacraments in Christianity.

i) _____

ii) _____

c) In which African country was Jesus taken when he was young?



Or: a) What happened to Prophet Mohammed on the day of Miraj.

b) Name two caliphs who replaced Mohammed.

i) _____

ii) _____

c) Why did Prophet Mohammed go to Medina?

53. **Either:** a) Identify one type of marriage in Uganda.

b) State two reasons why Christians marry.

i) _____

ii) _____

c) Mention one quality of a good partner to marry.

Or: a) Write down one type of marriage in Uganda.

b) State two reasons why Muslims marry.

i) _____

ii) _____

c) Mention one quality of a good husband / wife to marry.

54. **Either:** a) Write in full the following;

i) UJCC

ii) YMCA

b) How can Christians serve the needy in the community?

i) _____

ii) _____

Or: a) Write the following in full

i) UMSC

ii) UMEA

b) How can Muslims serve the needy in the community?

i) _____

ii) _____

55. **Both:** a) What is sin?

b) Give two reasons why there is high rate of sin today.

i) _____

ii) _____

c) How can we avoid sin?

